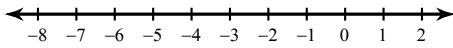


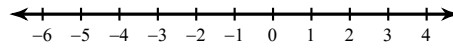
# Multi-Step Inequalities

**Solve each inequality and graph its solution.**

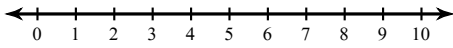
1)  $3 < -5n + 2n$



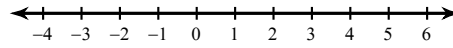
2)  $6x + 2 + 6x < 14$



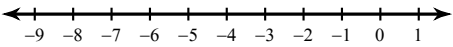
3)  $-p - 4p > -10$



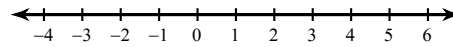
4)  $18 \geq 5k + 4k$



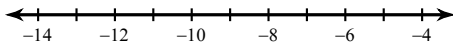
5)  $9 \geq -2m + 2 - 3$



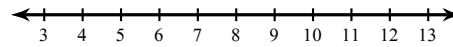
6)  $-3 - 6(4x + 6) > -111$



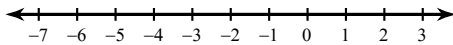
7)  $6 - 4(6n + 7) \geq 122$



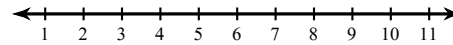
8)  $-138 \geq -6(6b - 7)$



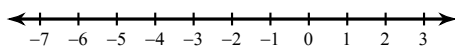
9)  $167 < 6 + 7(2 - 7r)$



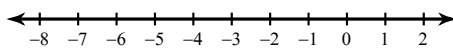
10)  $5(6 + 3r) + 7 \geq 127$



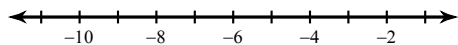
11)  $-8x + 2x - 16 < -5x + 7x$



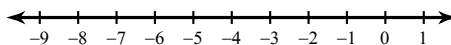
12)  $-1 - 6x - 6 > -11 - 7x$



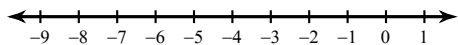
13)  $a - 6 \leq 15 + 8a$



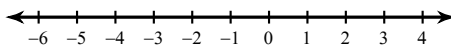
14)  $13 + 2v - 8 + 6 > -7 - v$



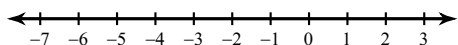
15)  $-5n - 6n \leq 8 - 8n - n$



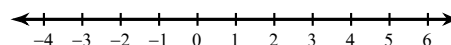
16)  $-x < -x + 7(x - 2)$



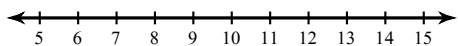
17)  $-5n + 6 \geq -7(5n - 6) - 6n$



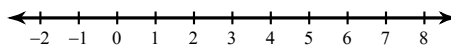
18)  $3(p - 3) - 5p > -3p - 6$



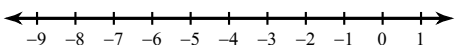
19)  $28 - k \geq 7(k - 4)$



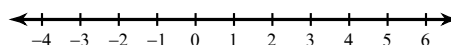
20)  $28 - 7x \leq -4(-7x - 7)$



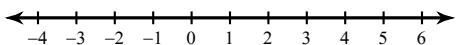
21)  $-6(1 + 7k) + 7(1 + 6k) \leq -2$



22)  $-2(2 - 2x) - 4(x + 5) \leq -24$



23)  $3(1 - 2x) > 3 - 6x$



24)  $-2(5 + 6n) < 6(8 - 2n)$

